


Pets

I Spy and Count Checklist Answers

Count the number of each type of pet and write the numeral in the box.


1

snake



6

tortoise



2

parrots



7

rabbits



3

mice




8

dogs



4

lizards



9

cats



5

chickens



10

fish

