

Houses and Homes


I Spy and Count to 10 Answers

Count the number of each type of house or home and write the numeral in the box.

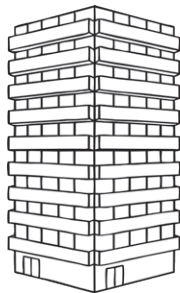
8 houses



7 cottages



5 flats




4 huts




10 caravans




3 igloos



6 boathouses



2 castles



9 bungalows



1 manor house

