



Polar Bear Measuring

How many cubes tall are the polar bears? Use your cubes to measure how tall the polar bears are.
Write the number of cubes in each box.




cubes tall



cubes tall



cubes tall



cubes tall

