

Use your number line to solve each addition or subtraction sentence, then compare. The first one has been done as an example for you.

> greater than

< fewer than


= equal to

$$\begin{array}{r} 16 + 4 \\ (20) \end{array}$$




$$\begin{array}{r} 11 + 3 \\ (14) \end{array}$$

$$\begin{array}{r} 18 - 3 \\ (\quad) \end{array}$$




$$\begin{array}{r} 12 - 3 \\ (\quad) \end{array}$$

$$\begin{array}{r} 20 - 6 \\ (\quad) \end{array}$$




$$\begin{array}{r} 19 - 5 \\ (\quad) \end{array}$$

$$\begin{array}{r} 11 + 4 \\ (\quad) \end{array}$$




$$\begin{array}{r} 17 - 2 \\ (\quad) \end{array}$$

$$\begin{array}{r} 18 - 8 \\ (\quad) \end{array}$$



$$\begin{array}{r} 14 - 2 \\ (\quad) \end{array}$$

$$\begin{array}{r} 13 + 6 \\ (\quad) \end{array}$$



$$\begin{array}{r} 13 + 4 \\ (\quad) \end{array}$$